

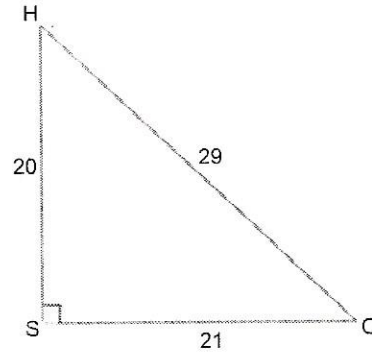
Calculating sin, cos, and tan

Name _____ Date _____ Number _____

Calculate the sin, cos, and tan for the following angles in each of the triangles. Please give 4 numerals after the decimal point. You may use a calculator, but please show your work (what numbers you divided to get each of your answers) on the back or on a separate sheet of paper.

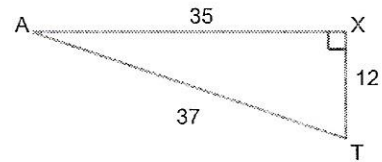
1

Angle	sin	cos	tan
H			
O			



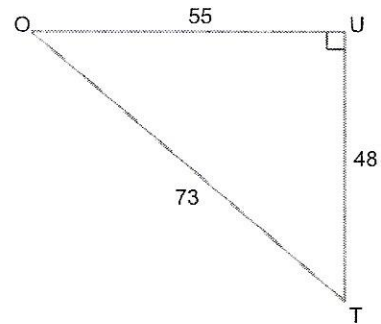
2.

Angle	sin	cos	tan
A			
T			



3.

Angle	sin	cos	tan
O			
T			



4.

Angle	sin	cos	tan
M			
B			

